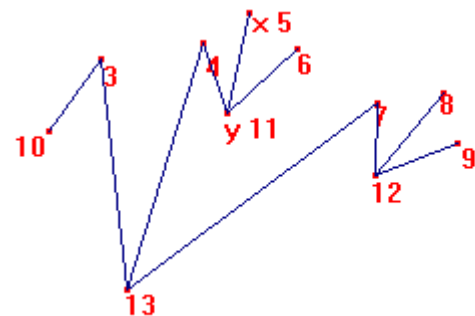
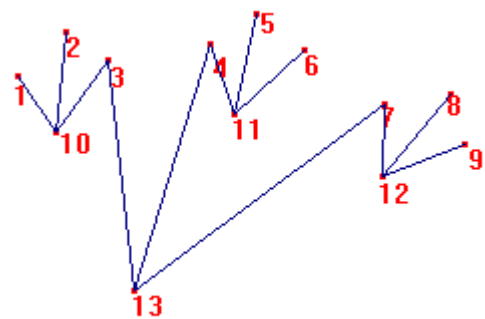


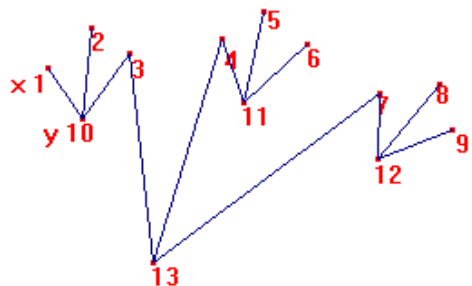
Eyus Sudihartinih
 Tugas MK Matematika Diskrit

Carilah Kode prufer dari graf berikut.

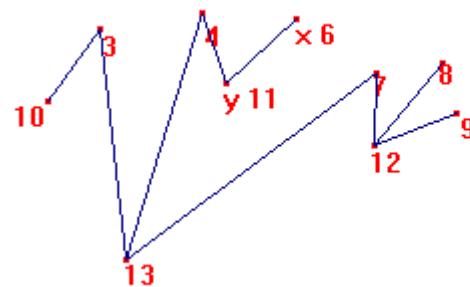


10 10 11

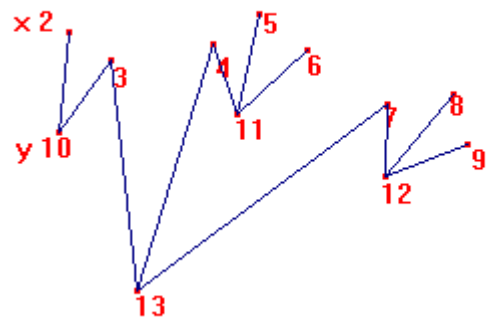
Penyelesaian:



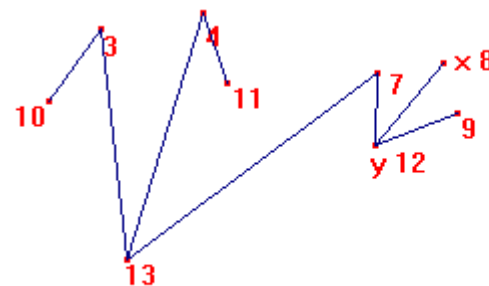
10



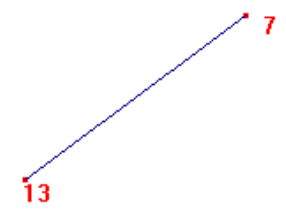
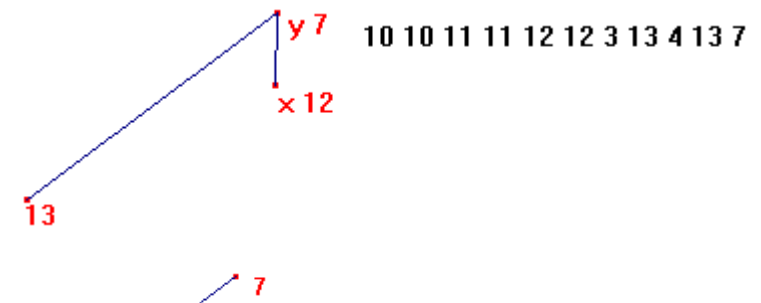
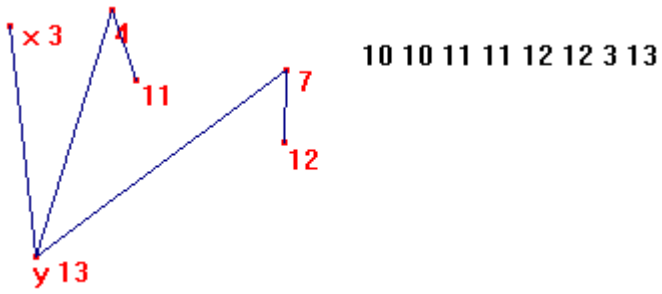
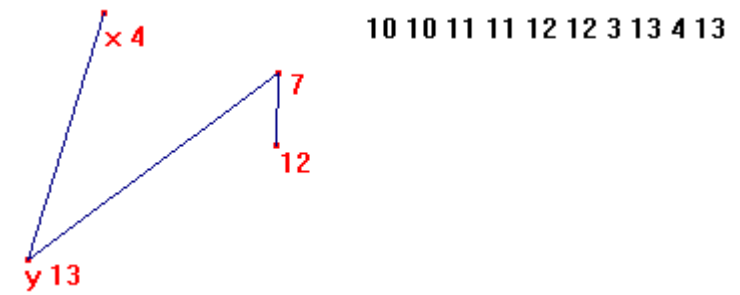
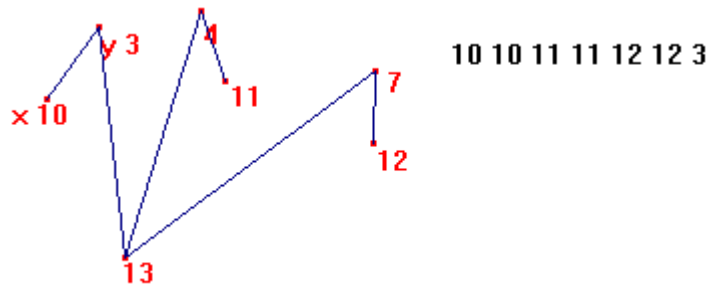
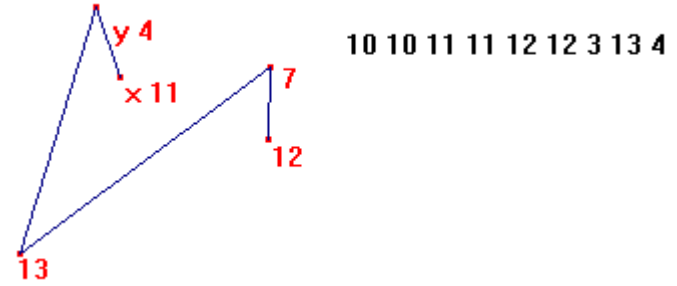
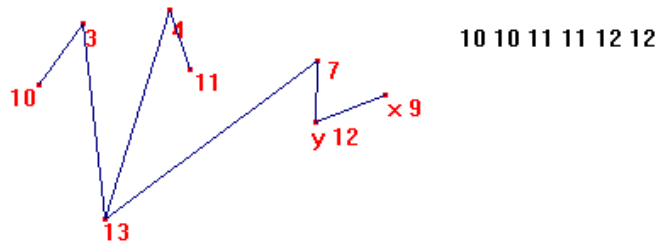
10 10 11 11



10 10



10 10 11 11 12



Jadi, Kode Prufer dari graf tersebut adalah :

10 10 11 11 12 12 3 13 4 13 7

Eyus Sudihartinih
 Tugas MK Matematika Diskrit

Tentukan graf dari Kode Prufer 2332423.

Penyelesaian:

a. $\underline{2}332423$ $\underline{1}23456789$

b. $\underline{3}32423$ $2345\underline{6}789$

c. $\underline{3}2423$ $2346\underline{7}89$

d. $\underline{2}423$ $2347\underline{8}9$

e. $\underline{4}23$ $2348\underline{9}$

f. $\underline{2}3$ $234\underline{9}$

g. $\underline{3}$ $23\underline{9}$

h. 23

